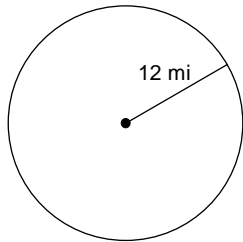


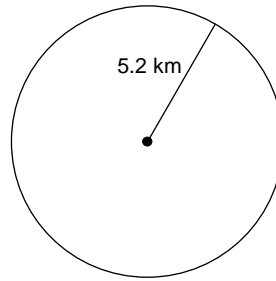
Finding the Area of a Circle

Find the area of each. Round to the nearest tenth.

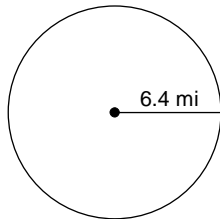
1)



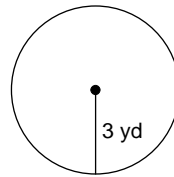
2)



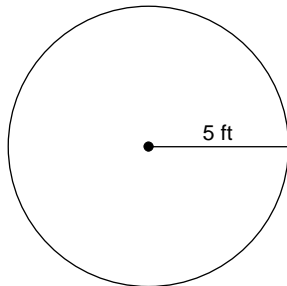
3)



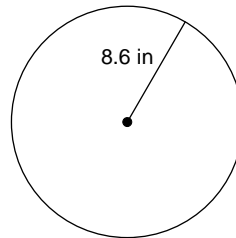
4)



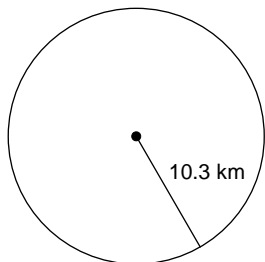
5)



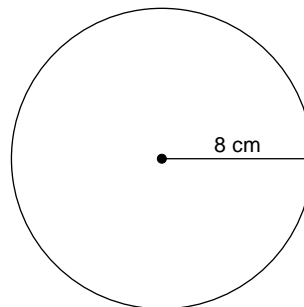
6)



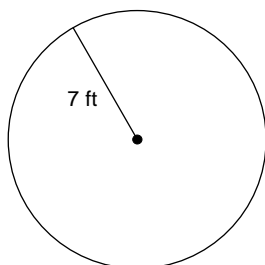
7)



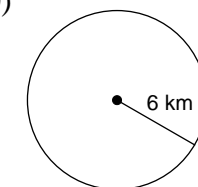
8)



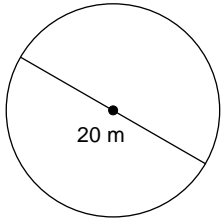
9)



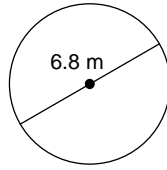
10)



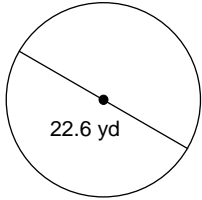
11)



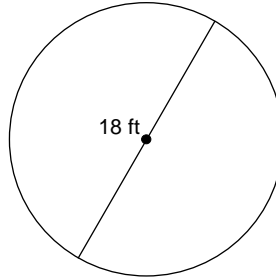
12)



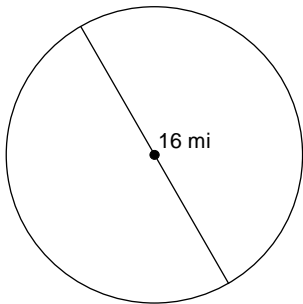
13)



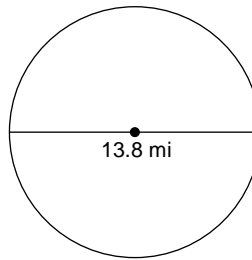
14)



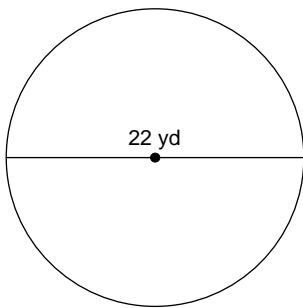
15)



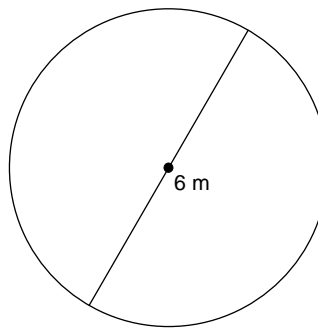
16)



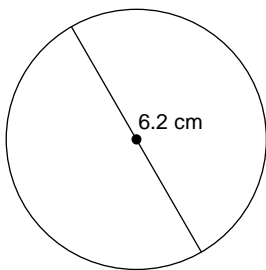
17)



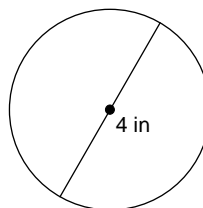
18)



19)



20)



Answers to Finding the Area of a Circle

1) 452.4 mi²

5) 78.5 ft²

9) 153.9 ft²

13) 401.1 yd²

17) 380.1 yd²

2) 84.9 km²

6) 232.4 in²

10) 113.1 km²

14) 254.5 ft²

18) 28.3 m²

3) 128.7 mi²

7) 333.3 km²

11) 314.2 m²

15) 201.1 mi²

19) 30.2 cm²

4) 28.3 yd²

8) 201.1 cm²

12) 36.3 m²

16) 149.6 mi²

20) 12.6 in²